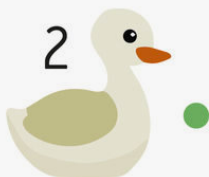


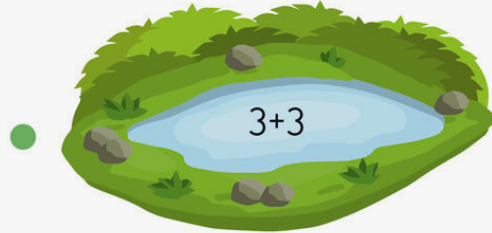


## 2 Rybník pre kačičky

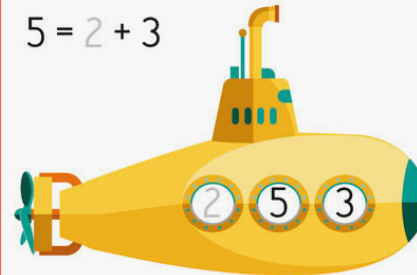
Spočítaj príklady a podľa výsledku prived' kačičky k správne mu rybníku.



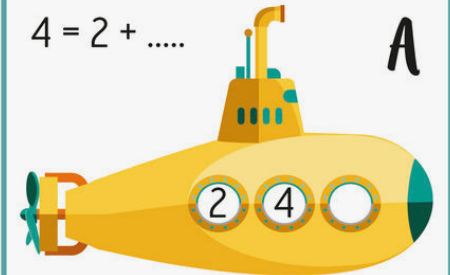
## 3 Nauč sa počítať

Spočítaj príklady a doplň chýbajúcu číslicu do každej ponorky. Skôr ako začneš, pozri sa na vzorový príklad.

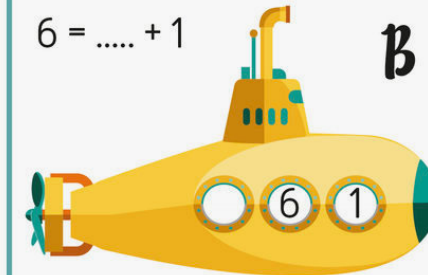
$$5 = 2 + 3$$



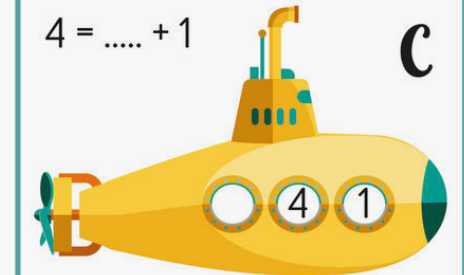
$$4 = 2 + \dots$$



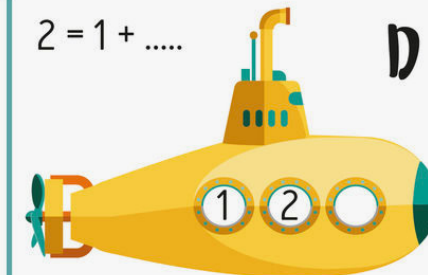
$$6 = \dots + 1$$



$$4 = \dots + 1$$



$$2 = 1 + \dots$$



$$6 = 4 + \dots$$

